

Georgia
CRCT
online



5th Grade Math Quiz

Fifth Grade Mathematics
Quiz

Practice Test

Name: _____

Date: _____

Instructions:

Name: _____

Quiz: 5th Grade Math Quiz

Date: _____

Teacher: Practice Test

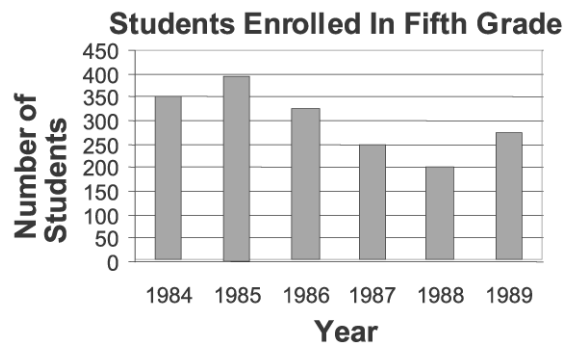
1. How will the value of 3,695,474.28 change if the 7 is replaced with a 1?

- A. The digit in the tens place will become greater.
 - B. The number will become smaller.
 - C. There will be no digit in the tens place.
 - D. There will be a 1 in the hundreds place.
-

2. Which numeral is in the hundreds place in 243,605?

- A. 0
 - B. 3
 - C. 4
 - D. 6
-

3. How many more students were enrolled in 1986 than in 1988?



- A. 5
 - B. 75
 - C. 125
 - D. 200
-

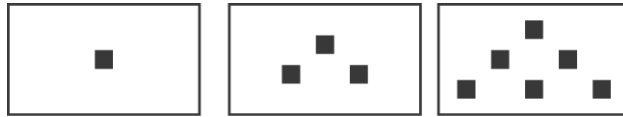
Name: _____

Quiz: 5th Grade Math Quiz

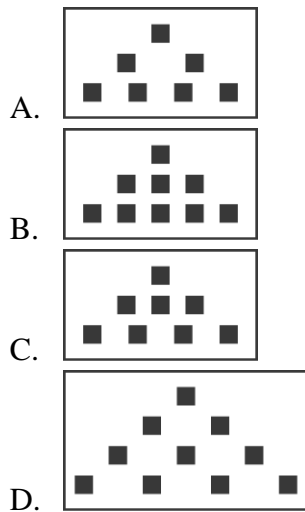
Date: _____

Teacher: Practice Test

Use the picture below to answer question 4.



4. Which box would most likely be next in the picture?



Look at the pattern of ordered pairs below.

(1, 7), (3, 21), (5, 35)

5. Which is the next ordered pair in the pattern?

- A. (7,49)
 - B. (7,42)
 - C. (6,42)
 - D. (8,56)
-

Name: _____

Quiz: 5th Grade Math Quiz

Date: _____

Teacher: Practice Test

6. Which flavor would a person be LEAST likely to get from the gumball machine?

Flavor	Number
Cherry	7
Grape	3
Mint	2
Orange	4

- A. cherry
 - B. grape
 - C. mint
 - D. orange
-

7. Which digits can be in the ones place of a number if it is divisible by 5?

- A. 2 or 5
 - B. 5 or 0
 - C. 5 or 3
 - D. 0 or 3
-

8. Butch Reynolds (USA) holds the world-record time of 43.29 seconds in the 400-meter race. Quincy Watts (USA) is second fastest, with a time of 43.50 seconds. How much faster was Butch in his race?

- A. 0.21 seconds
 - B. 0.39 seconds
 - C. 2.1 seconds
 - D. 21 seconds
-

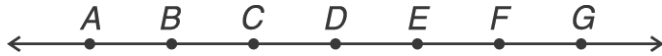
Name: _____

Quiz: 5th Grade Math Quiz

Date: _____

Teacher: Practice Test

Use the figure below to answer question 9.



9. In the figure above, points labeled *A* through *G* are spaced evenly along a line. Which distance is the greatest?

- A. from *A* to *D*
 - B. from *F* to *C*
 - C. from *E* to *G*
 - D. from *E* to *A*
-

10. Which of these units is the best unit for measuring the distance between Georgia and California?

- A. meter
 - B. millimeter
 - C. centimeter
 - D. kilometer
-

11. Find the product of $24 \times 16 \times 10$.

- A. 3,440
 - B. 3,480
 - C. 3,840
 - D. 3,940
-

12. Subtract.

$$8.4 - 2.3 = \square$$

- A. 5.1
 - B. 6.1
 - C. 6.7
 - D. 10.7
-

Name: _____

Quiz: 5th Grade Math Quiz

Date: _____

Teacher: Practice Test

13. Judy babysat for 6 hours. She earns \$2.00 for every hour she works. Which number sentence will tell how much money she earned?

A. $2 + 6$

B. $6 - 2$

C. 2×6

D. $6 \div 2$

14. It takes Tomas about 2 hours to deliver the 57 newspapers on his route. He earns \$0.10 for each newspaper he delivers. About how much does Tom make per hour?

A. \$8.00

B. \$6.00

C. \$3.00

D. \$2.00

15. Naomi had a mean of 90 on three spelling tests. Which grades could have been hers?

A. 60, 90, 90

B. 75, 90, 95

C. 85, 90, 95

D. 90, 95, 100
