

Georgia
CRCT
online



4th Math Quiz B

Fourth Grade Mathematics
Quiz

Practice Test

Name: _____

Date: _____

Instructions:

Name: _____

Quiz: 4th Math Quiz B

Date: _____

Teacher: Practice Test

1. Which symbol belongs in the ?

$$2 \times 9 \quad \square \quad 6 \times 3$$

- A. >
 - B. <
 - C. =
 - D. \neq
-

2. Mrs. Hathaway uses the graph below to show how many pages her students have read for the reading contest.

Number of Pages Read

| | |
|-------|---|
| Leon | <input type="checkbox"/> <input type="checkbox"/> <input type="checkbox"/> <input type="checkbox"/> |
| Megan | <input type="checkbox"/> <input type="checkbox"/> <input type="checkbox"/> <input type="checkbox"/> <input type="checkbox"/> <input type="checkbox"/> |
| Jaime | <input type="checkbox"/> <input type="checkbox"/> <input type="checkbox"/> <input type="checkbox"/> |

10 pages

How many pages have the three students read in all?

- A. 130
 - B. 140
 - C. 150
 - D. 160
-

3. Which statement is true?

- A. $641 > 656$
 - B. $745 < 742$
 - C. $862 > 869$
 - D. $934 < 938$
-

Name: _____

Quiz: 4th Math Quiz B

Date: _____

Teacher: Practice Test

4. Round the number 268 to the nearest hundred.

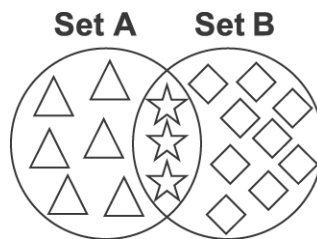
- A. 300
 - B. 265
 - C. 260
 - D. 200
-

5. What are the next two numbers in the sequence?

8 11 9 12 10 ___ ___

- A. 10 and 12
 - B. 12 and 13
 - C. 13 and 14
 - D. 13 and 11
-

6. How many shapes are in set B?



- A. 3
 - B. 6
 - C. 9
 - D. 12
-

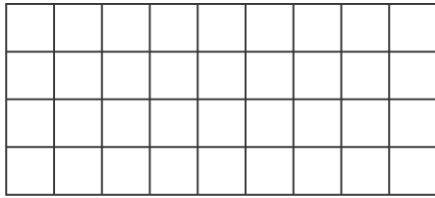
Name: _____

Quiz: 4th Math Quiz B

Date: _____

Teacher: Practice Test

7. What is the area of this shape?



- A. 26 square centimeters
 - B. 36 square centimeters
 - C. 50 square centimeters
 - D. 81 square centimeters
-

8. Ms. Castillo's class went on a nature walk. They kept a journal of all the things they saw. At the end of the day, they had seen thirteen different kinds of trees, twenty-one kinds of flowers, seven rabbits, thirty-two birds, and twelve squirrels. How many animals did the class see on their walk?

- A. 85
 - B. 51
 - C. 34
 - D. 19
-

9. Bonnie went shopping at a toy store. She spent \$5.89 on a jigsaw puzzle, \$8.32 on a game, and \$3.17 on a jump rope. About how much did she spend?

- A. \$16.00
 - B. \$17.00
 - C. \$18.00
 - D. \$19.00
-

Name: _____

Quiz: 4th Math Quiz B

Date: _____

Teacher: Practice Test

10. Which shows a ray?

- A. ●
- B. ●————●
- C. ●————→
- D. ●————→
 ↗

11. Which fraction represents the shaded area?



- A. $\frac{3}{10}$
 - B. $\frac{6}{10}$
 - C. $\frac{7}{10}$
 - D. $\frac{10}{10}$
-

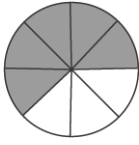
Name: _____

Quiz: 4th Math Quiz B

Date: _____

Teacher: Practice Test

12. Ivan and Kim had $\frac{5}{8}$ of a blueberry pie. They ate $\frac{2}{8}$ of the pie.



How much of the pie did they have left?

- A. $\frac{2}{8}$
 - B. $\frac{3}{8}$
 - C. $\frac{5}{8}$
 - D. $\frac{7}{8}$
-

13. Each student needed 3 books. There were 22 students in the class. How many books were needed?

What is the operation to solve the problem?

- A. subtraction
 - B. multiplication
 - C. division
 - D. comparison
-

Name: _____

Quiz: 4th Math Quiz B

Date: _____

Teacher: Practice Test

14. Which of these fractions is LEAST?

A. $\frac{1}{9}$

B. $\frac{4}{9}$

C. $\frac{5}{9}$

D. $\frac{6}{9}$

15. Solve.

$$\begin{array}{r} 617 \\ \times 72 \\ \hline \end{array}$$

A. 5,523

B. 6,218

C. 37,069

D. 44,424
