

Georgia
CRCT
online



4th Grade Math Quiz

Fourth Grade Mathematics
Quiz

Practice Test

Name: _____

Date: _____

Instructions:

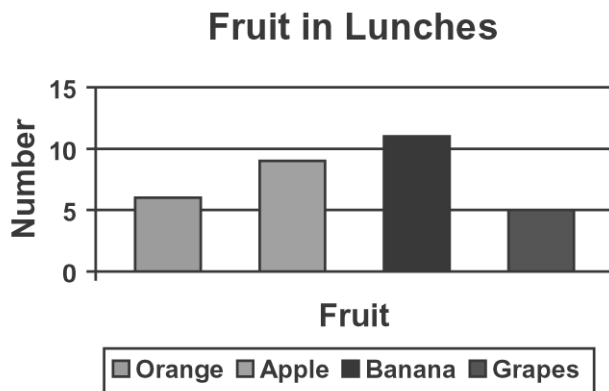
Name: _____

Quiz: 4th Grade Math Quiz

Date: _____

Teacher: Practice Test

1. The graph shows the number of children who had each type of fruit in their lunches today.



Which type of fruit did MOST children have?

- A. orange
 - B. grapes
 - C. banana
 - D. apple
-

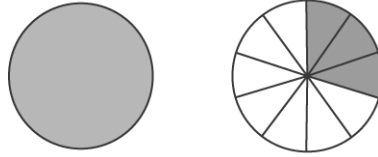
Name: _____

Quiz: 4th Grade Math Quiz

Date: _____

Teacher: Practice Test

2. Which is NOT a way to represent this picture?



- A. $1\frac{3}{10}$
 - B. one and three-tenths
 - C. 1.3
 - D. $1\frac{1}{2}$
-

3. Ms. Castillo's class went on a nature walk. They kept a journal of all the things they saw. At the end of the day, they had seen thirteen different kinds of trees, twenty-one kinds of flowers, seven rabbits, thirty-two birds, and twelve squirrels. How many animals did the class see on their walk?

- A. 85
 - B. 51
 - C. 34
 - D. 19
-

4. Select the appropriate symbol.

$$\begin{array}{r} 36 \\ \square 42 \\ \hline 78 \end{array}$$

- A. \times
 - B. $-$
 - C. $+$
 - D. \div
-


Name: _____

Quiz: 4th Grade Math Quiz

Date: _____

Teacher: Practice Test

5. Which number sentence goes with this picture?



- A. $7 + 35 = 42$
 - B. $21 + 21 = 42$
 - C. $2 \times 21 = 42$
 - D. $6 \times 7 = 42$
-

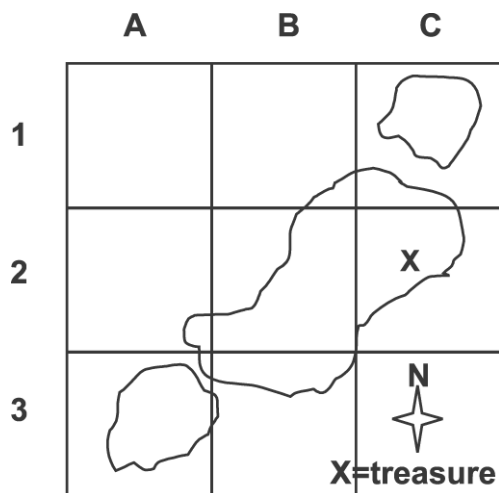
Name: _____

Quiz: 4th Grade Math Quiz

Date: _____

Teacher: Practice Test

6. Marco found a treasure map. What is the ordered pair for the location of the treasure?



Name: _____

Quiz: 4th Grade Math Quiz

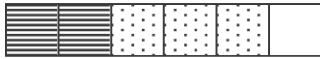
Date: _____

Teacher: Practice Test

- A. (2, C)
 - B. (C, 2)
 - C. (3, C)
 - D. (C, 3)
-

7. Add.

$$\frac{3}{6} + \frac{2}{6} =$$



- A. $\frac{1}{6}$
 - B. $\frac{5}{6}$
 - C. $\frac{5}{12}$
 - D. $\frac{6}{12}$
-

Name: _____

Quiz: 4th Grade Math Quiz

Date: _____

Teacher: Practice Test

8. Danny and Julie have new sticker books. Danny will put 4 stickers in his book every day and Julie will put 6 stickers in her book every day. How many stickers will Danny have when Julie has 30 in her book? (Hint: To find the answer, use this table.)

DAY	DANNY	JULIE
1	4	6
2	8	12
3	_____	_____
4	_____	_____
5	_____	_____
6	_____	_____

- A. 20
 - B. 24
 - C. 30
 - D. 36
-

9. Which method would BEST help you solve this problem?

There are 4 boxes of apples.

There are 3 apples in each box.

How many apples are there?

- A. draw a picture
 - B. guess and check
 - C. work backwards
 - D. look for a pattern
-

Name: _____

Quiz: 4th Grade Math Quiz

Date: _____

Teacher: Practice Test

10. Which would be the BEST unit to measure a person's height?

- A. pound
 - B. quart
 - C. feet
 - D. decade
-

11. Which of these fractions is LEAST?

- A. $\frac{1}{9}$
 - B. $\frac{4}{9}$
 - C. $\frac{5}{9}$
 - D. $\frac{6}{9}$
-

12. Round 764 to the nearest 10.

- A. 700
 - B. 760
 - C. 770
 - D. 800
-

13. Which of the following are prime numbers whose sum is 9?

- A. $9 + 1$
 - B. $3 + 6$
 - C. $4 + 5$
 - D. $2 + 7$
-

Name: _____

Quiz: 4th Grade Math Quiz

Date: _____

Teacher: Practice Test

14. Select the correct symbol.

$$\begin{array}{r} 24 \\ \square 2 \\ \hline 48 \end{array}$$

- A. +
 - B. -
 - C. ×
 - D. ÷
-

15. Daphne bought a balloon with the money shown below.



How much did Daphne pay for the balloon?

- A. \$0.97
 - B. \$0.92
 - C. \$0.87
 - D. \$0.82
-