

Georgia  
**CRCT**  
online



## 3rd Social Studies Test B

Third Grade Social Studies  
Test

Practice Test

Name: \_\_\_\_\_

Date: \_\_\_\_\_

### **Instructions:**

Name: \_\_\_\_\_

Test: 3rd Social Studies Test B

Date: \_\_\_\_\_

Teacher: Practice Test

---

---

1. Which is built with local government tax money?

- A. malls
  - B. hotels
  - C. schools
  - D. restaurants
-

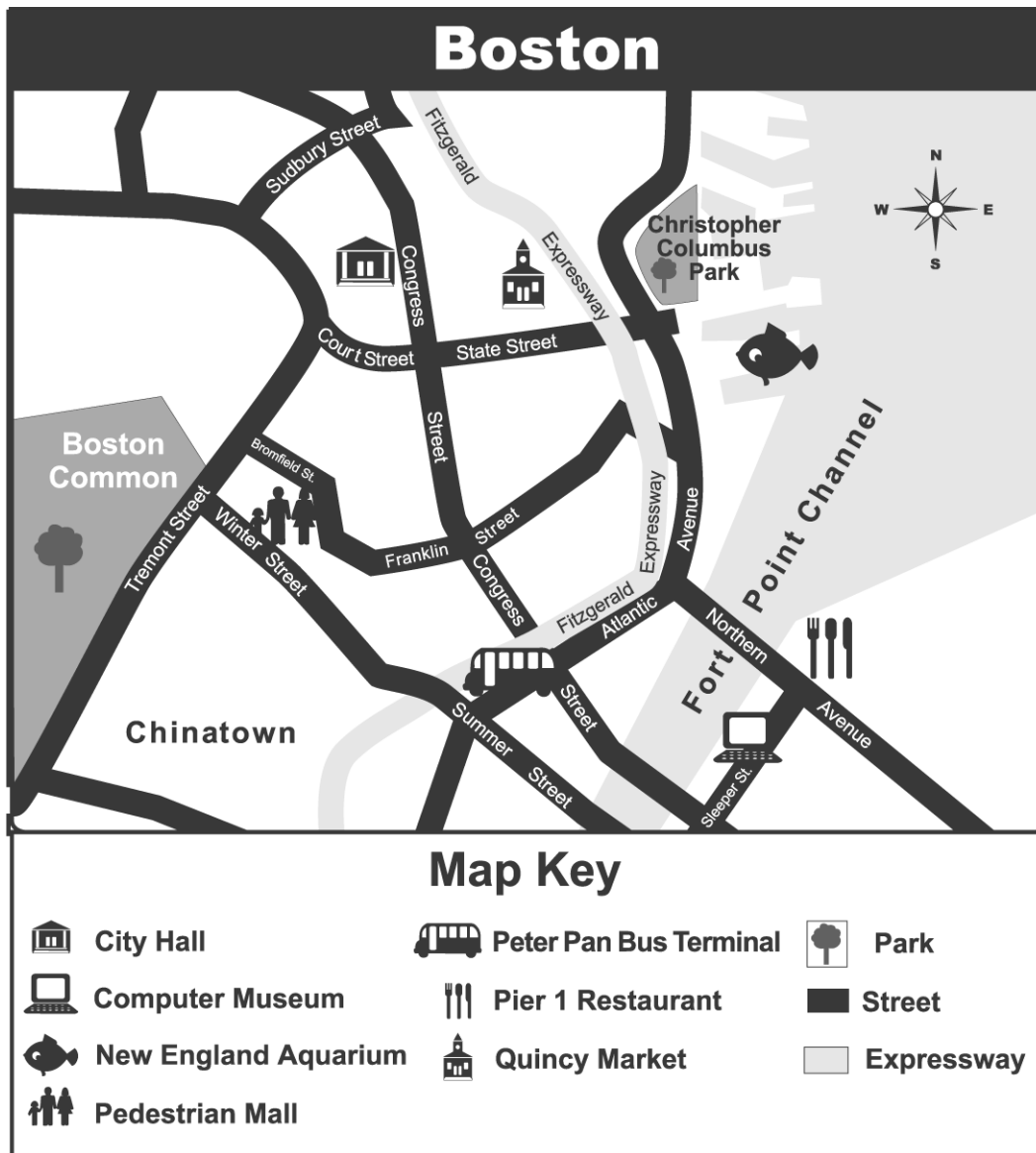
Name: \_\_\_\_\_

Test: 3rd Social Studies Test B

Date: \_\_\_\_\_

Teacher: Practice Test

Use the map of Boston below to answer questions 2 through 3.



Name: \_\_\_\_\_

Test: 3rd Social Studies Test B

Date: \_\_\_\_\_

Teacher: Practice Test

---

2. Where is the Computer Museum located?

- A. on Sleeper Street
  - B. west of Boston Common
  - C. north of Peter Pan Bus Terminal
  - D. beside Christopher Columbus Park
- 

3. If you were looking for Pier 1, which street should you go to?

- A. Fitzgerald Expressway
  - B. Tremont Street
  - C. Atlantic Avenue
  - D. Northern Avenue
- 

4. Which of the following MOST LIKELY makes up a local community's government?

- A. a governor and senators
  - B. a president and congress
  - C. a mayor and city council
  - D. a police chief and policemen
- 

5. What is the MAIN role of the military forces of the United States?

- A. to help the sick
  - B. to teach the children
  - C. to defend the country
  - D. to find citizens who break laws
-

Name: \_\_\_\_\_

Test: 3rd Social Studies Test B

Date: \_\_\_\_\_

Teacher: Practice Test

---

6. All United States citizens have the right to

- A. set their own pay.
  - B. take whatever they want.
  - C. say what they think.
  - D. own a car and house.
-

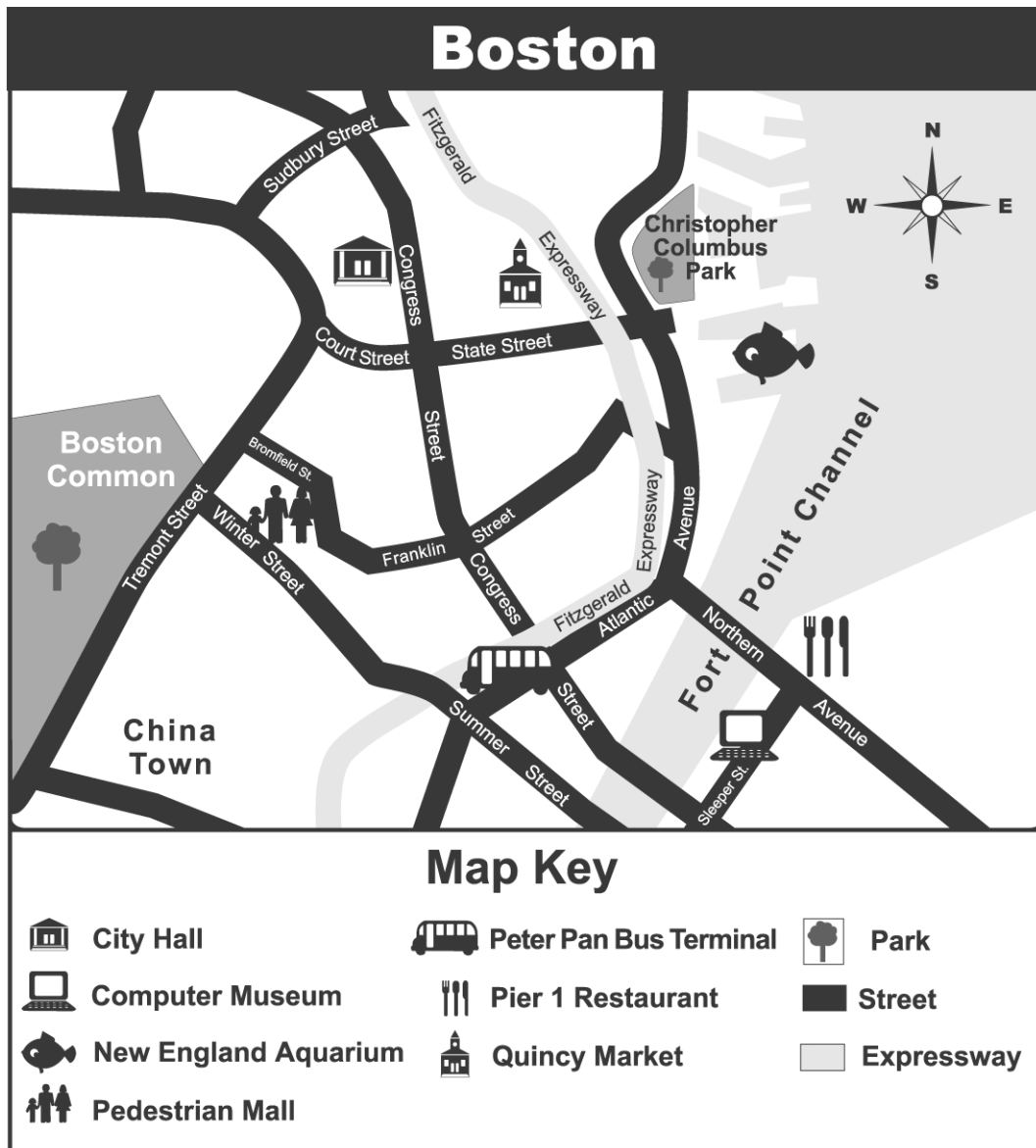
Name: \_\_\_\_\_

Test: 3rd Social Studies Test B

Date: \_\_\_\_\_

Teacher: Practice Test

Use the map below to answer questions 7 through 9.



Name: \_\_\_\_\_

Test: 3rd Social Studies Test B

Date: \_\_\_\_\_

Teacher: Practice Test

---

7. Which part of the map is China Town located in?

- A. west
  - B. southwest
  - C. east
  - D. southeast
- 

8. If you were looking for a restaurant, which street should you go to?

- A. Fitzgerald Expressway
  - B. Tremont Street
  - C. Atlantic Avenue
  - D. Northern Avenue
- 

9. Which of the following is MOST LIKELY to be a natural feature?

- A. City Hall
  - B. Columbus Park
  - C. Computer Museum
  - D. Quincy Market
- 

10. Jane lives on a large farm located several miles from her neighbors. What type of community does she probably live in?

- A. rural
  - B. urban
  - C. mountain
  - D. suburban
-

Name: \_\_\_\_\_

Test: 3rd Social Studies Test B

Date: \_\_\_\_\_

Teacher: Practice Test

---

11. Why were the people of the Cherokee Nation sent on the Trail of Tears?

- A. There was too much fighting among tribes.
  - B. There was little rain and crops died.
  - C. The Cherokee wanted to learn English and own land.
  - D. The colonists wanted the land used by the Cherokee.
- 

12. What is one of the many important jobs that a mayor has?

- A. carrying out a budget
  - B. appointing a governor
  - C. defending lawbreakers
  - D. ruling on court cases
- 

13. Who writes the laws that are signed by the president of the United States?

- A. Congress
  - B. governors
  - C. businessmen
  - D. commissioners
- 

14. Robert and his mom are baking cookies. Which will they do first?

- A. Put the cookies in the oven.
  - B. Get out the ingredients they need.
  - C. Mix all of the ingredients together.
  - D. Eat the cookies and have a glass of milk.
-

Name: \_\_\_\_\_

Test: 3rd Social Studies Test B

Date: \_\_\_\_\_

Teacher: Practice Test

---

15. Gasoline is made from oil. If oil is hard to get, what will MOST LIKELY happen?

- A. The price of gas will go down.
  - B. Most gas stations will close.
  - C. The price of gas will go up.
  - D. Many people will drive more.
- 

16. Which could Tony do to earn money to buy a new light for his bike?

- A. baby-sit for a neighbor
  - B. watch game shows on television
  - C. volunteer at the hospital
  - D. play a video game
- 

17. The price of corn has gone down. Which statement tells why this MOST likely happened?

- A. More corn was produced.
  - B. Bad weather ruined many corn crops.
  - C. Advertising made more people want corn.
  - D. Corn farmers wanted to make more money.
- 

18. Which rule or law would NOT keep the people in your community safe?

- A. Cars must stop at stop signs.
  - B. Bike riders should wear helmets.
  - C. Cars can turn right at red lights.
  - D. People should always wear seatbelts.
-

Name: \_\_\_\_\_

Test: 3rd Social Studies Test B

Date: \_\_\_\_\_

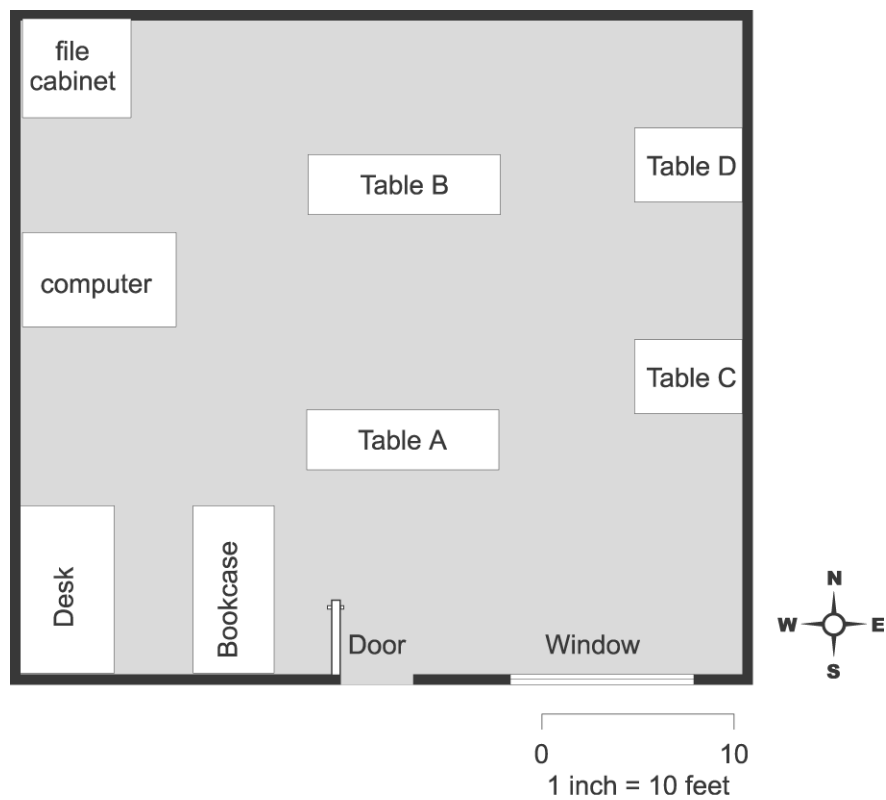
Teacher: Practice Test

---

19. In Georgia, who is the leader of the state government?

- A. mayor
  - B. senator
  - C. governor
  - D. president
- 

Use the drawing of a room below to answer questions 20 through 21.



Name: \_\_\_\_\_

Test: 3rd Social Studies Test B

Date: \_\_\_\_\_

Teacher: Practice Test

---

20. What is located in the northwest corner of the room?

- A. a desk
  - B. a door
  - C. Table D
  - D. a file cabinet
- 

21. In which direction does the window face?

- A. north
  - B. south
  - C. east
  - D. west
- 

22. Many people have cars and use them to go to work, go shopping, and do many other things. If oil is hard to get and gas prices go up, what would MOST LIKELY happen?

- A. Nothing would happen because there are thousands of gas stations.
  - B. The price would go back down soon because gas station managers do not want to lose customers.
  - C. Car owners would decide to carpool, ride the bus, walk, or buy a smaller car that needs less gas.
  - D. Gas stations would sell more gas so people will not run out.
- 

23. How can you volunteer in your school?

- A. read to another class
  - B. eat a healthy lunch
  - C. make good grades
  - D. come to school every day
-

Name: \_\_\_\_\_

Test: 3rd Social Studies Test B

Date: \_\_\_\_\_

Teacher: Practice Test

---

24. Which of the following laws helps prevent car accidents?

- A. You must pay taxes.
  - B. You must wear a seat belt.
  - C. You must pay for gasoline.
  - D. You must stop at red lights.
- 

25. Which level (type) of government is made up of a president and a group of legislators?

- A. city government
  - B. state government
  - C. county government
  - D. national government
-