

Georgia
CRCT
online



3rd Social Studies Quiz B

Third Grade Social Studies
Quiz

Practice Test

Name: _____

Date: _____

Instructions:

Name: _____

Quiz: 3rd Social Studies Quiz B

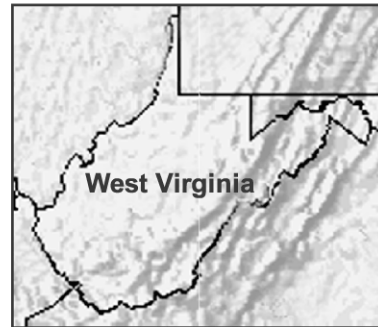
Date: _____

Teacher: Practice Test

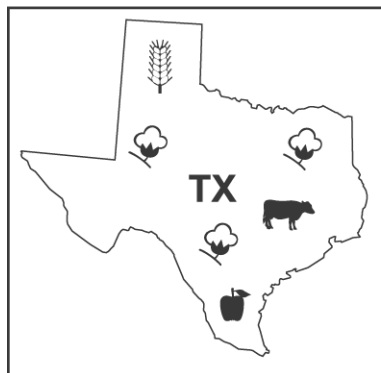
Use the maps below to answer questions 1 to 2.



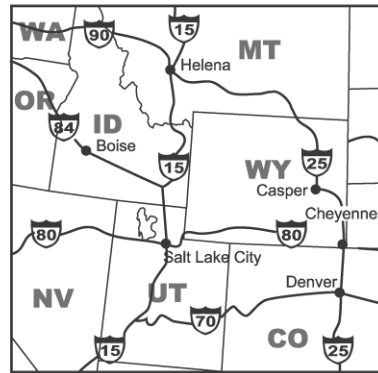
1



2



3



4

1. What kind of map is Map 3?

- A. political map
 - B. physical map
 - C. resources map
 - D. neighborhood map
-

Name: _____

Quiz: 3rd Social Studies Quiz B

Date: _____

Teacher: Practice Test

2. A person going on a trip by car would use

- A. Map 1.
 - B. Map 2.
 - C. Map 3.
 - D. Map 4.
-

Use the map below to answer questions 3 through 5.



3. Which city is a state capital?

- A. Ogden
 - B. Tucson
 - C. Santa Fe
 - D. Colorado Springs
-

Name: _____

Quiz: 3rd Social Studies Quiz B

Date: _____

Teacher: Practice Test

4. Which region of the United States does the map show?

- A. the Northeast
 - B. the Northwest
 - C. the Southeast
 - D. the Southwest
-

5. Which type of map is this?

- A. resource map
 - B. political map
 - C. landform map
 - D. physical map
-

Name: _____

Quiz: 3rd Social Studies Quiz B

Date: _____

Teacher: Practice Test

Use the map below to answer questions 6 through 8.



Name: _____

Quiz: 3rd Social Studies Quiz B

Date: _____

Teacher: Practice Test

6. Which part of the map is China Town located in?

- A. west
 - B. southwest
 - C. east
 - D. southeast
-

7. If you were looking for a restaurant, which street should you go to?

- A. Fitzgerald Expressway
 - B. Tremont Street
 - C. Atlantic Avenue
 - D. Northern Avenue
-

8. Which of the following is MOST LIKELY to be a natural feature?

- A. City Hall
 - B. Columbus Park
 - C. Computer Museum
 - D. Quincy Market
-