

Georgia  
**CRCT**  
online



## 3rd Grade Social Studies Quiz

Third Grade Social Studies  
Quiz

Practice Test

Name: \_\_\_\_\_

Date: \_\_\_\_\_

### **Instructions:**

Name: \_\_\_\_\_

Quiz: 3rd Grade Social Studies Q

Date: \_\_\_\_\_

Teacher: Practice Test

---

---

1. In what kind of community would a cotton farmer MOST LIKELY live?

- A. rural
  - B. urban
  - C. mountain
  - D. suburban
-

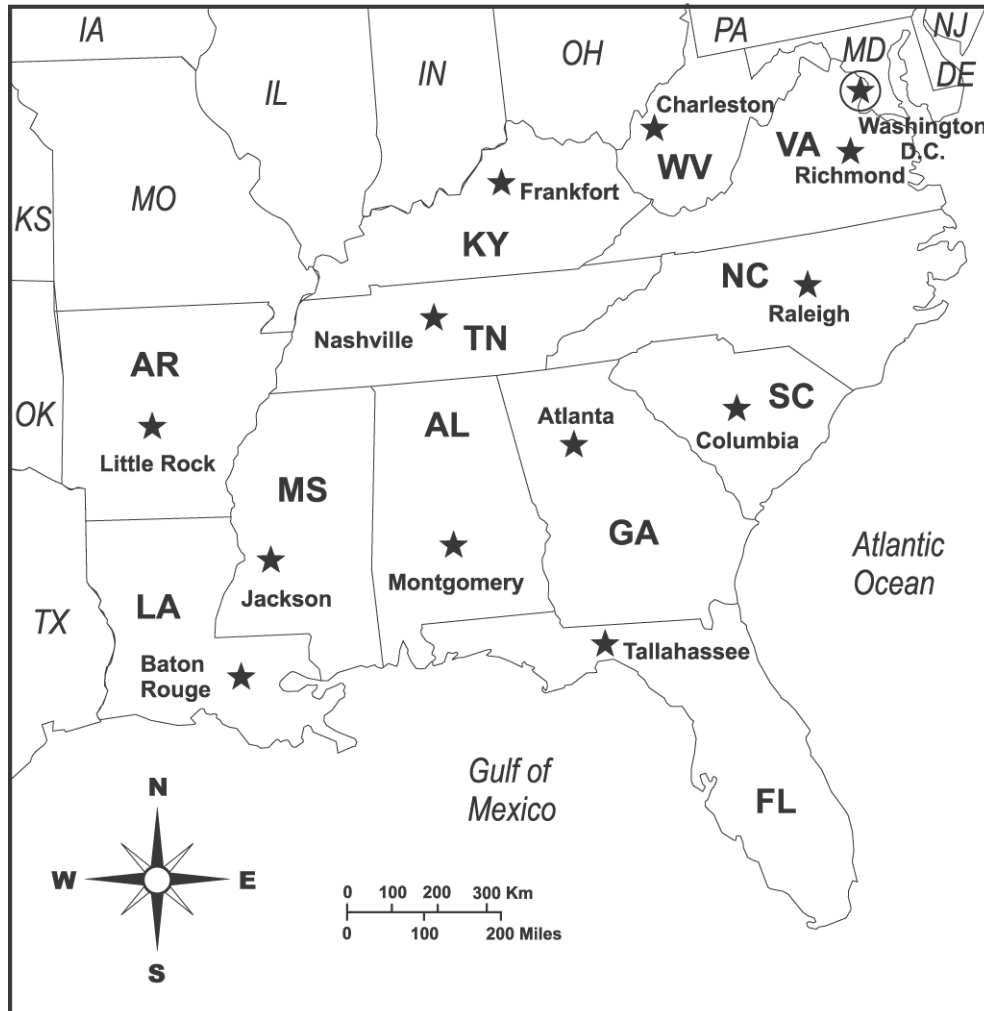
Name: \_\_\_\_\_

Quiz: 3rd Grade Social Studies Q

Date: \_\_\_\_\_

Teacher: Practice Test

Use the map below to answer questions 2 through 3.



KEY	
★ (in circle)	Nation Capital
★	State Capital

Name: \_\_\_\_\_

Quiz: 3rd Grade Social Studies Q

Date: \_\_\_\_\_

Teacher: Practice Test

---

2. Which city is located about 200 miles southwest of Atlanta?

- A. Tallahassee
  - B. Nashville
  - C. Montgomery
  - D. Jackson
- 

3. Charleston is the capital of which state?

- A. Kentucky (KY)
  - B. South Carolina (SC)
  - C. Virginia (VA)
  - D. West Virginia (WV)
-

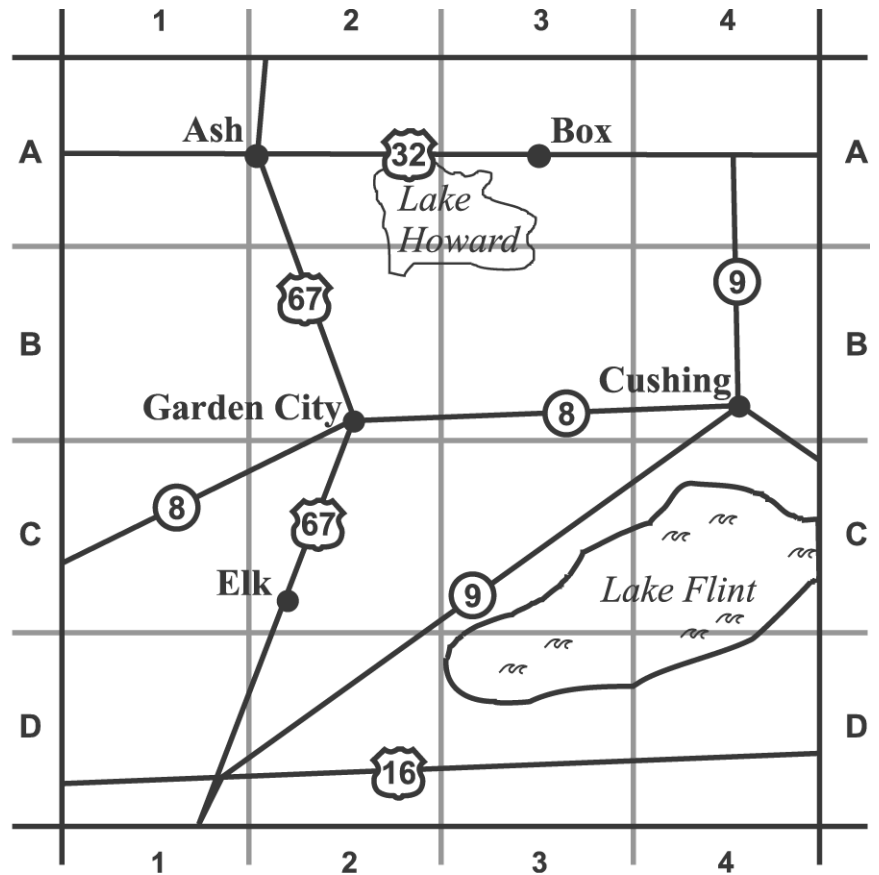
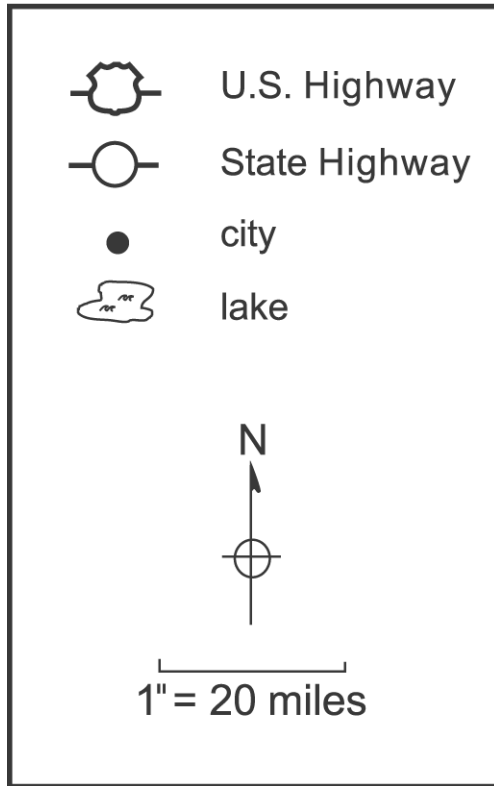
Name: \_\_\_\_\_

Quiz: 3rd Grade Social Studies Q

Date: \_\_\_\_\_

Teacher: Practice Test

Use the map below to answer questions 4 through 6.



4. Which city is located in square B-4?

- A. Elk
- B. Box
- C. Garden City
- D. Cushing

Name: \_\_\_\_\_

Quiz: 3rd Grade Social Studies Q

Date: \_\_\_\_\_

Teacher: Practice Test

---

5. Which grid square does NOT contain part of a lake?

- A. C-3
  - B. C-4
  - C. A-2
  - D. A-4
- 

6. About how far is Cushing from Garden City?

- A. 10 miles
  - B. 20 miles
  - C. 40 miles
  - D. 80 miles
- 
- 
- 
- 
- 
- 
- 
- 
- 
- 

Use the map of Georgia below to answer questions 7 through 8.

7. What region is labeled number "3"?

- A. Ridge and Valley
- B. plateau
- C. Coastal Plain
- D. Piedmont

8. What region is labeled number "4"?

- A. Ridge and Valley
  - B. plateau
  - C. Coastal Plain
  - D. Piedmont
-

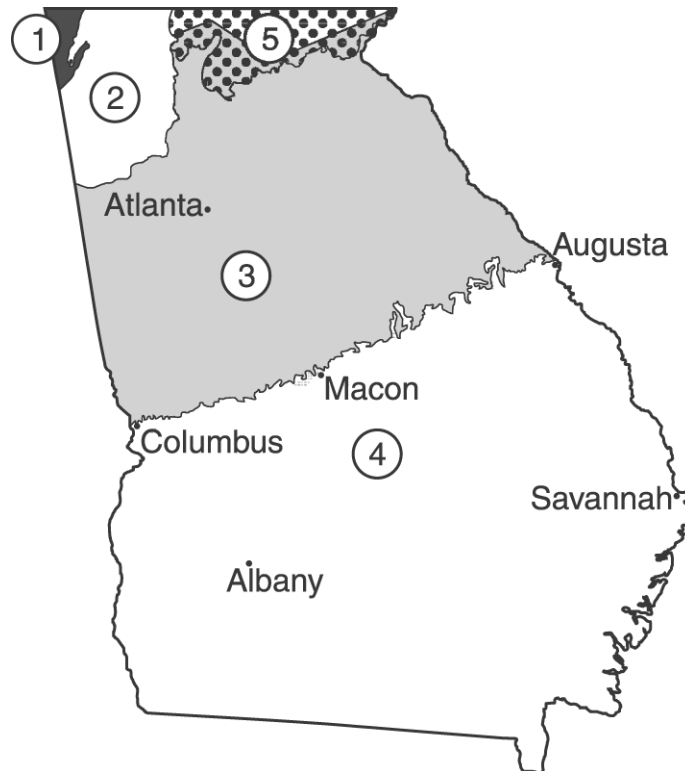
Name: \_\_\_\_\_

Quiz: 3rd Grade Social Studies Q

Date: \_\_\_\_\_

Teacher: Practice Test

---



9. Mrs. Powell and her daughters are moving to a mountain community in the western part of the United States. Which of the following describes what they might find in their new community?
- A. large forest areas filled with wildlife
  - B. gently rolling land and beautiful farms
  - C. very few water sources and little rainfall
  - D. a moderate climate with adequate rainfall
10. James Oglethorpe and Tomochichi, chief of the Yamacraw, worked together for the good of the early colonists and the Native Americans. Where did they share their land?
- A. Savannah
  - B. Atlanta
  - C. Jekyll Island
  - D. Fort Augusta
11. The Creeks and Yamacraws did not wear much clothing except in the winter, when they wore deerskin cloaks. This was because
- A. they did not know how to sew.
  - B. cloth had not been invented yet.

Name: \_\_\_\_\_

Quiz: 3rd Grade Social Studies Q

Date: \_\_\_\_\_

Teacher: Practice Test

---

- C. they were not allowed to wear clothes.
- D. the climate was warm enough that they did not need many clothes.