

Georgia  
**CRCT**  
online



## 3rd Grade Science Quiz

Third Grade Science  
Quiz

Practice Test

Name: \_\_\_\_\_

Date: \_\_\_\_\_

### **Instructions:**

Name: \_\_\_\_\_

Quiz: 3rd Grade Science Quiz

Date: \_\_\_\_\_

Teacher: Practice Test

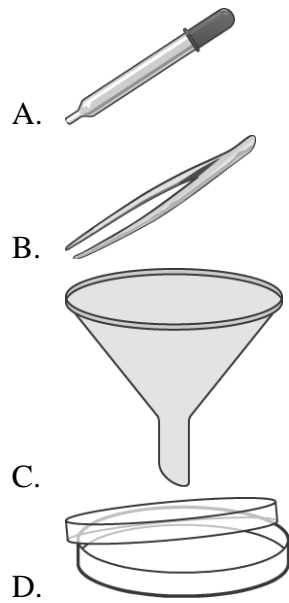
---

---

1. Seeds are made by

- A. rain.
  - B. soil.
  - C. plants.
  - D. clouds.
- 

2. Which tool is used to help pour sand into small jars?



Name: \_\_\_\_\_

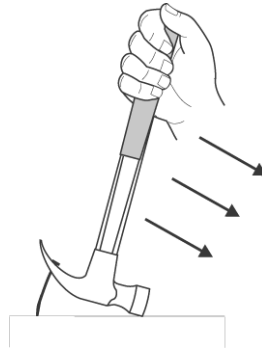
Quiz: 3rd Grade Science Quiz

Date: \_\_\_\_\_

Teacher: Practice Test

---

Use the picture below to answer question 3.



3. Jacob needs to pull down on a hammer to take a nail out of a piece of wood. Jacob is using the hammer as

- A. a lever.
  - B. a pulley.
  - C. a wheel and axle.
  - D. an inclined plane.
- 

4. Which is NOT a natural source of energy?

- A. soil
  - B. wind
  - C. sunlight
  - D. underground hot water
- 

5. Which tool tells the way the wind is blowing?

- A. barometer
  - B. rain gauge
  - C. thermometer
  - D. weather vane
-

Name: \_\_\_\_\_

Quiz: 3rd Grade Science Quiz

Date: \_\_\_\_\_

Teacher: Practice Test

---

6. When you walk on the sidewalk and roll your bike, the force you use is a

- A. pull.
  - B. pulley.
  - C. push.
  - D. lever.
- 

7. Some modern houses have large windows that face toward the south. This helps heat the house by using

- A. electrical energy.
  - B. geothermal energy.
  - C. solar energy.
  - D. nuclear energy.
- 

8. When heat is added to water, the water gets

- A. warm.
  - B. cool.
  - C. light.
  - D. dark.
- 

9. Rocks break down to

- A. plants.
  - B. cells.
  - C. fossils.
  - D. soil.
-

Name: \_\_\_\_\_

Quiz: 3rd Grade Science Quiz

Date: \_\_\_\_\_



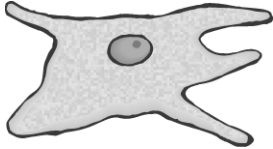

Teacher: Practice Test

---

10. Which animal does NOT look like its parent when it hatches?

- A. alligator
  - B. spider
  - C. tadpole
  - D. turtle
- 

11. Which drawing shows a cell?

- A. 
  - B. 
  - C. 
  - D. 
-

Name: \_\_\_\_\_


Quiz: 3rd Grade Science Quiz

Date: \_\_\_\_\_

Teacher: Practice Test

---

12. Your hand will feel hot when you put it next to



A. **a book**



B. **a lightbulb**



C. **an umbrella**



D. **a telephone**

---

Name: \_\_\_\_\_

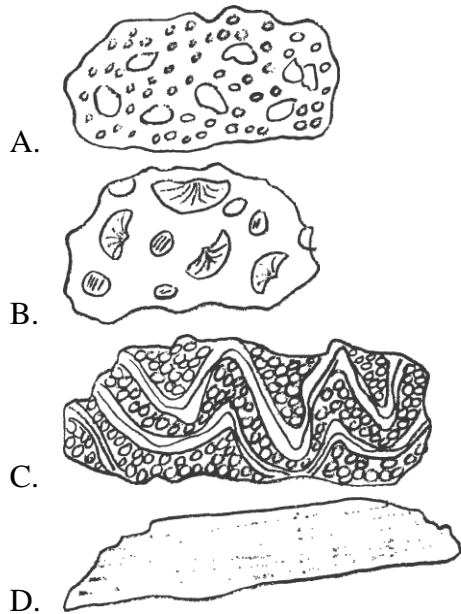
Quiz: 3rd Grade Science Quiz

Date: \_\_\_\_\_

Teacher: Practice Test

---

13. Which rock was MOST LIKELY changed by heat and pressure?



Name: \_\_\_\_\_

Quiz: 3rd Grade Science Quiz

Date: \_\_\_\_\_

Teacher: Practice Test


---

Use the picture below to answer question 14.



**pot of water**

14. What happens when you add heat to a pot of water?



Name: \_\_\_\_\_

Quiz: 3rd Grade Science Quiz

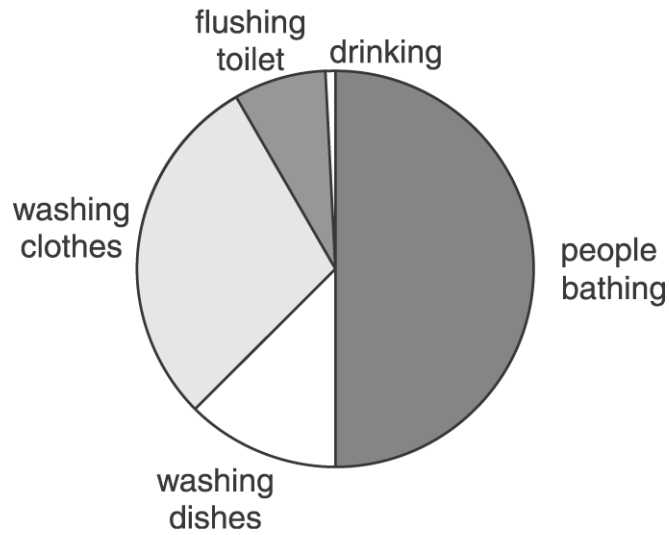
Date: \_\_\_\_\_

Teacher: Practice Test

---

Use the graph below to answer question 15.

### Daily Water Use by a Family



15. According to the graph, which activity uses the MOST water?

- A. toilet flushing
  - B. washing clothes
  - C. washing dishes
  - D. people bathing
-