

Georgia
CRCT
online



3rd Grade Math Quiz

Third Grade Mathematics
Quiz

Practice Test

Name: _____

Date: _____

Instructions:

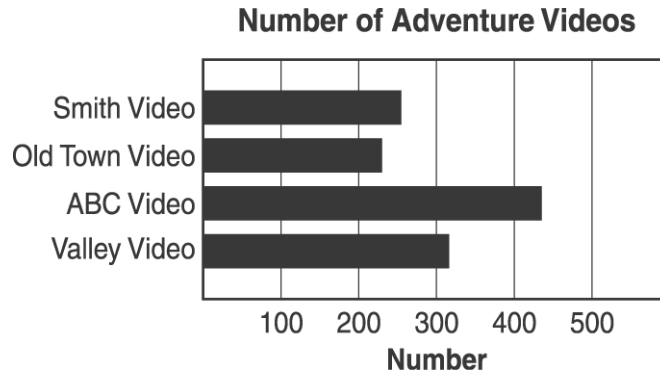
Name: _____

Quiz: 3rd Grade Math Quiz

Date: _____

Teacher: Practice Test

The graph below shows how many adventure movies that four video stores have.



1. Which video store would be most likely to have the adventure video you want to see?
- A. ABC Video
 - B. Old Town Video
 - C. Smith Video
 - D. Valley Video
-

Name: _____

Quiz: 3rd Grade Math Quiz

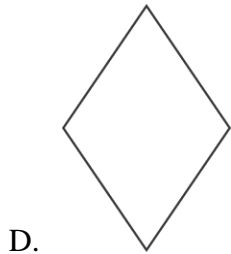

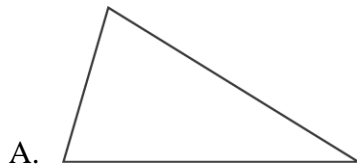
Date: _____

Teacher: Practice Test

Use the picture below to answer question 2.



2. Which shape will fit into the center of the picture?




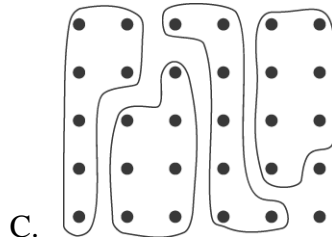
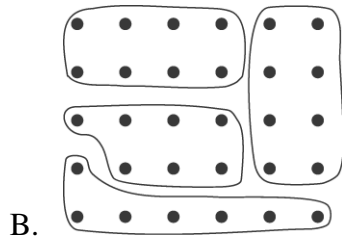
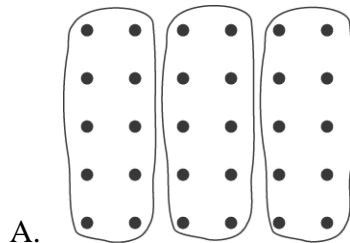
Name: _____

Quiz: 3rd Grade Math Quiz

Date: _____

Teacher: Practice Test

3. Jason is having a birthday party. His mother told him that he could divide 30 stickers among the 4 friends he has invited. If Jason gives each friend the same number of stickers, which picture below shows how many stickers each friend will get?



-
4. The length of a shirt sleeve is best measured in

- A. inches.
 - B. feet.
 - C. yards.
 - D. miles.
-


Name: _____

Quiz: 3rd Grade Math Quiz

Date: _____

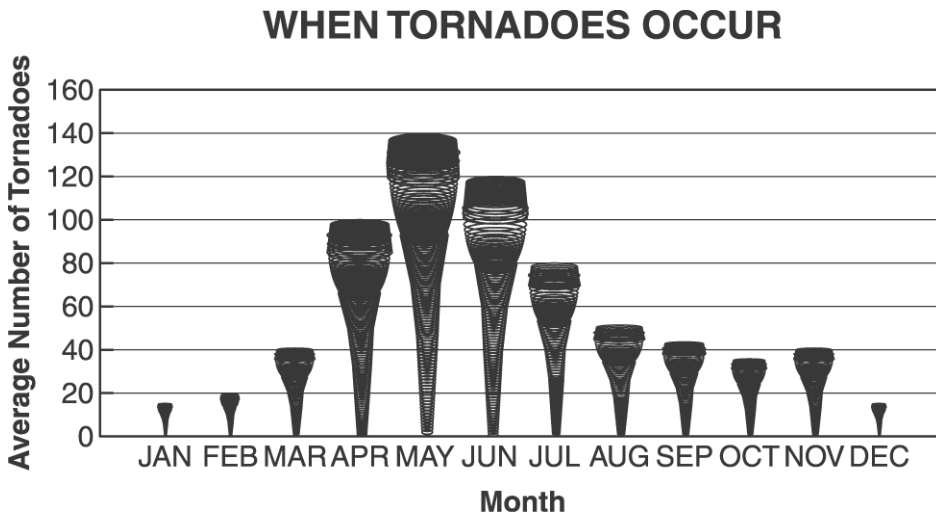
Teacher: Practice Test

5. Which number sentence matches the picture?



- A. $3 + 5$
 - B. $15 - 3$
 - C. 5×3
 - D. 15×3
-

Use the graph below to answer question 6.



6. About how many tornadoes are there in February?

- A. 40
 - B. 30
 - C. 20
 - D. 10
-

Name: _____

Quiz: 3rd Grade Math Quiz

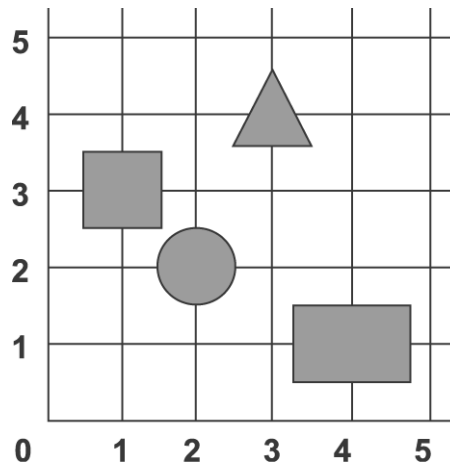
Date: _____

Teacher: Practice Test

7. Nikki is making two pizzas. She has 12 pieces of pepperoni and she wants each pizza to have the same number of pieces of pepperoni. How many pieces of pepperoni should she put on each pizza?

- A. 6
 - B. 10
 - C. 14
 - D. 24
-

8. Where is the circle located?



- A. (1, 3)
 - B. (2, 2)
 - C. (3, 4)
 - D. (4, 1)
-

9. Bev buys an apple for 49 cents and a cookie for 16 cents. How much change does she get back from \$1.00?

- A. 35¢
 - B. 45¢
 - C. 55¢
 - D. 65¢
-

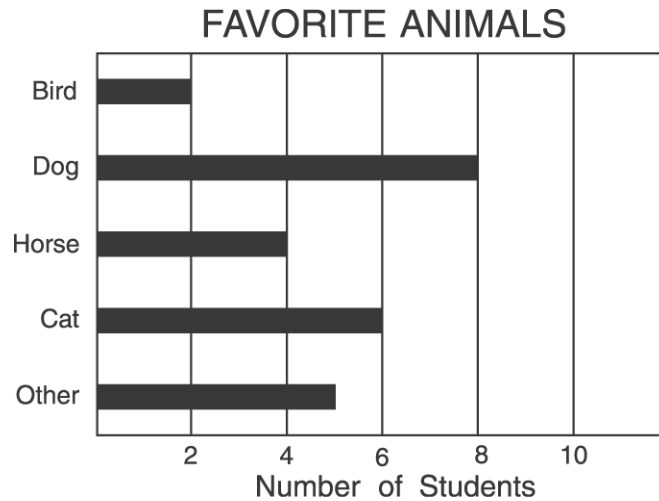
Name: _____

Quiz: 3rd Grade Math Quiz

Date: _____

Teacher: Practice Test

Ms. Avola's class took a survey about their favorite animals. The graph below shows the results.



10. How many more students chose dogs than cats?

- A. 2 more students
 - B. 4 more students
 - C. 6 more students
 - D. 14 more students
-

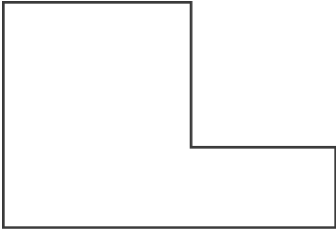
Name: _____

Quiz: 3rd Grade Math Quiz

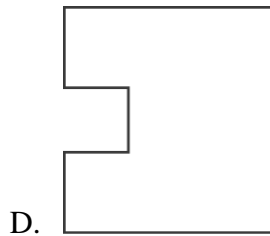
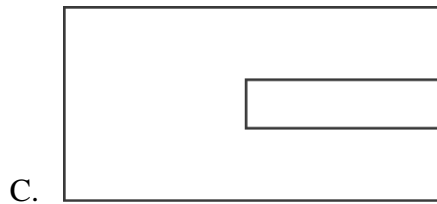
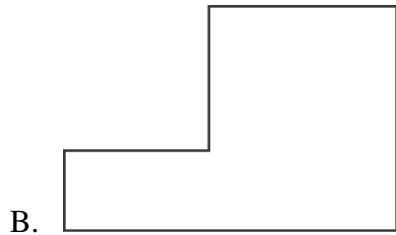
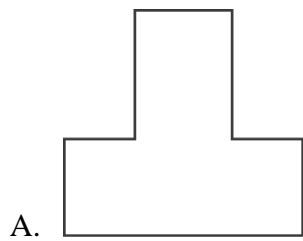
Date: _____

Teacher: Practice Test

Use the shape below to answer question 11



11. Which has the same shape as the shape above?



Name: _____

Quiz: 3rd Grade Math Quiz

Date: _____

Teacher: Practice Test

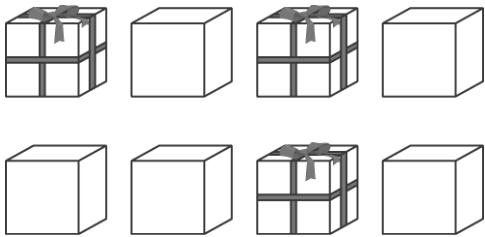
Use the chart below to answer question 12.

1	2	3	4	5	6	7	8	9	10
11	12	13	14	15	16	17	18	19	20
21	22	23	24	25	26	27	28	29	30
31	32	33	34	35	36	37	38	39	40

12. Sally will cross out the numbers she says as she counts by 5. Next she will cross out all the even numbers on the chart above. Which number will she NOT cross out?

- A. 20
 - B. 23
 - C. 35
 - D. 38
-

Use the picture below to answer question 13.



13. What fraction of the group of boxes is tied with ribbon?

- A. $\frac{3}{8}$
 - B. $\frac{3}{5}$
 - C. $\frac{8}{8}$
 - D. $\frac{8}{3}$
-

Name: _____

Quiz: 3rd Grade Math Quiz

Date: _____

Teacher: Practice Test

14. What is another name for 6,204?

- A. $6 + 2 + 0 + 4$
 - B. $60 + 20 + 10 + 4$
 - C. $600 + 200 + 100 + 4$
 - D. $6,000 + 200 + 4$
-

15. Which letter can be folded in half so the sides match?

- A. W
 - B. N
 - C. L
 - D. S
-