

Georgia  
**CRCT**  
online



## 2nd Math Quiz B

Second Grade Mathematics  
Quiz

Practice Test

Name: \_\_\_\_\_

Date: \_\_\_\_\_

**Instructions:**

Name: \_\_\_\_\_

Quiz: 2nd Math Quiz B

Date: \_\_\_\_\_




Teacher: Practice Test

---

1. Which number has a 2 in the tens place, a 5 in the ones place, and a 6 in the hundreds place?

- A. 256
  - B. 526
  - C. 625
- 

2. Which picture shows a square inside a circle?

- A. 
  - B. 
  - C. 
- 

3. Which two letters come next in this pattern?

**A B C C A B C C A B C C A B C \_ \_**

- A. A B
  - B. C A
  - C. C C
-

Name: \_\_\_\_\_

Quiz: 2nd Math Quiz B

Date: \_\_\_\_\_

Teacher: Practice Test

---

4. Which comes next in the pattern below?



A.



B.



C.



---

5. What number is one less than 35?

- A. 25
- B. 34
- C. 36

---

6. Kenisha had 9 fish. She bought 7 more. How many fish does she have now? 13. Which number belongs in the box below?

- A. 53
  - B. 60
  - C. 62
-

Name: \_\_\_\_\_

Quiz: 2nd Math Quiz B

Date: \_\_\_\_\_


Teacher: Practice Test

---

7. There are 18 red cars, 13 white cars, and 4 green cars in the parking lot. How many more red cars than white cars are there?

- A. 5
  - B. 9
  - C. 14
- 

8. What fraction of the animals are dogs?



- A.  $\frac{1}{2}$
  - B.  $\frac{1}{3}$
  - C.  $\frac{1}{4}$
- 

9. Add.

$$4 + 3 + 11 =$$

- A. 7
  - B. 17
  - C. 18
- 

10. Which number is one less than 510?

- A. 501
  - B. 509
  - C. 599
-

Name: \_\_\_\_\_

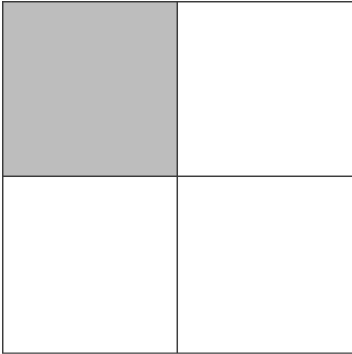
Quiz: 2nd Math Quiz B

Date: \_\_\_\_\_

Teacher: Practice Test

---

11. Look at the picture below.



What part is shaded?

- A. 14
  - B. 13
  - C. 12
- 

Milton is counting by 4s.



12. Which number should he say next?

- A. 30
  - B. 32
  - C. 34
-

Name: \_\_\_\_\_

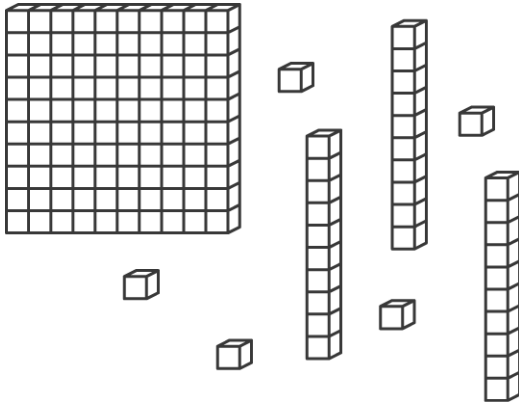
Quiz: 2nd Math Quiz B

Date: \_\_\_\_\_

Teacher: Practice Test

---

13. Look at the model below.



Which number does the model show?

- A. 135
  - B. 153
  - C. 315
-

Name: \_\_\_\_\_

Quiz: 2nd Math Quiz B


Date: \_\_\_\_\_

Teacher: Practice Test

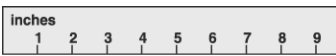
---



14. Beth is buying a pumpkin. Which of these should she use to find out how much the pumpkin costs?



A.



B.



C.

---

15. Which number is three hundred sixty-five?

A. 30,065

B. 3,605

C. 365

---