

Georgia  
**CRCT**  
online



## 2nd Grade Math Quiz

Second Grade Mathematics  
Quiz

Practice Test

Name: \_\_\_\_\_

Date: \_\_\_\_\_

**Instructions:**

Name: \_\_\_\_\_

Quiz: 2nd Grade Math Quiz

Date: \_\_\_\_\_

Teacher: Practice Test

---

---

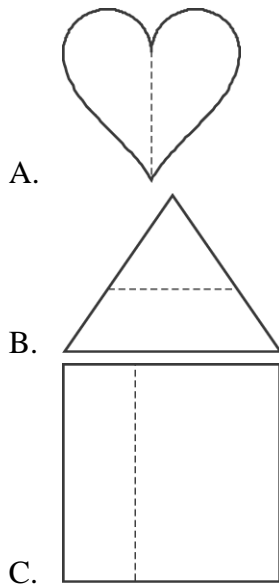
1. Look at the number pattern below.

|   |   |   |    |  |   |   |   |  |    |
|---|---|---|----|--|---|---|---|--|----|
| 3 | 6 | 9 | 12 |  | A | B | C |  | 30 |
|---|---|---|----|--|---|---|---|--|----|

Where does the number 24 go?

- A. block A
  - B. block B
  - C. block C
- 

2. Which figure could be folded on the line and have two equal parts?



Name: \_\_\_\_\_


Quiz: 2nd Grade Math Quiz

Date: \_\_\_\_\_

Teacher: Practice Test

---

3. Look at the picture below.

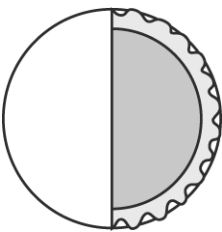
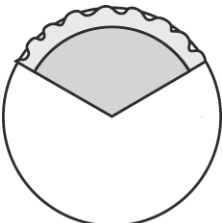
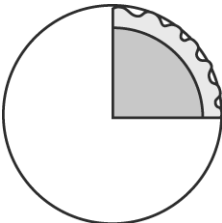


What part is shaded?

- A. 14
- B. 13
- C. 12

---

4. Which picture shows  $\frac{1}{4}$  of the pie?



Name: \_\_\_\_\_

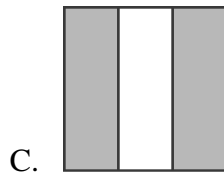
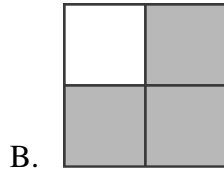
Quiz: 2nd Grade Math Quiz

Date: \_\_\_\_\_

Teacher: Practice Test

---

5. Which square is  $\frac{3}{4}$  shaded?



---

6. Add.

$$\begin{array}{r} 27 \\ + 16 \\ \hline \end{array}$$

A. 43

B. 33

C. 11

---

Name: \_\_\_\_\_

Quiz: 2nd Grade Math Quiz

Date: \_\_\_\_\_


Teacher: Practice Test

---


Ben had



7. He bought a paintbrush.



How much change did he get?

- A. 
  - B. 
  - C. 
-

Name: \_\_\_\_\_

Quiz: 2nd Grade Math Quiz

Date: \_\_\_\_\_


Teacher: Practice Test



---

8. Which number is one less than 310?

- A. 301
  - B. 309
  - C. 399
- 

Look at the balanced scale below.



-  weighs 50 grams
-  weighs 20 grams

9. How much does the orange weigh?

- A. 4 grams
  - B. 70 grams
  - C. 100 grams
- 

10. Kiki has to measure the length of her room. Which of these should she use?

- A. liters
  - B. meters
  - C. kilograms
-

Name: \_\_\_\_\_

Quiz: 2nd Grade Math Quiz

Date: \_\_\_\_\_

Teacher: Practice Test

---

11. Diane read 23 storybooks. She also read 16 comic books. How many books did Diane read in all?

- A. 13
  - B. 36
  - C. 39
- 

12. There are 98 people on the airplane but only 86 meals. How many more meals are needed?

- A. 12
  - B. 16
  - C. 20
- 

13. What number is one less than 35?

- A. 25
  - B. 34
  - C. 36
-

Name: \_\_\_\_\_

Quiz: 2nd Grade Math Quiz

Date: \_\_\_\_\_

Teacher: Practice Test

---

Look at the coins below.



14. Which group of coins is worth the same as the coins above?

- A.
- B.
- C.
-

Name: \_\_\_\_\_

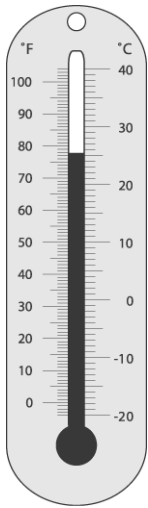
Quiz: 2nd Grade Math Quiz

Date: \_\_\_\_\_

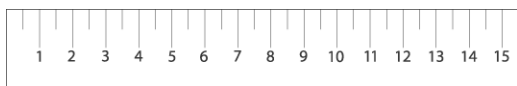
Teacher: Practice Test

---

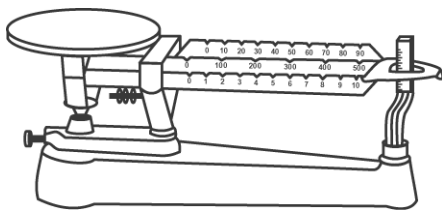
15. Which can be used to tell how cold it is outside?



A.



B.



C.