

Georgia
CRCT
online



1st Math Test B

First Grade Mathematics
Test

Practice Test

Name: _____

Date: _____

Instructions:

Name: _____

Test: 1st Math Test B

Date: _____

Teacher: Practice Test

1. Which shape comes next in the pattern below?



Name: _____

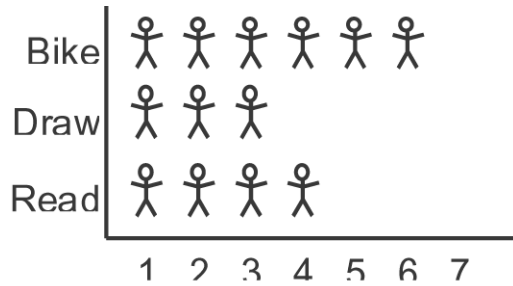
Test: 1st Math Test B

Date: _____

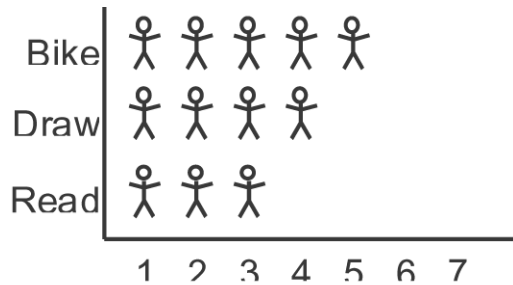
Teacher: Practice Test

2. The students in Mr. Sullivan's class took a survey of the things they liked to do. They found that 6 liked to ride their bike, 3 liked to draw, and 4 liked to read books. Which of the following graphs shows these numbers?

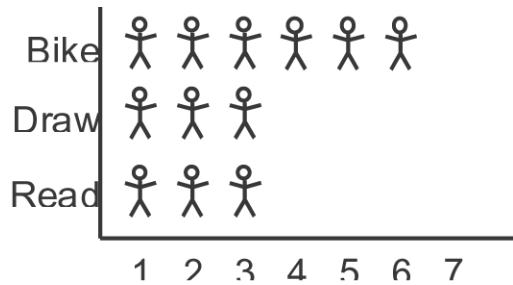
 means 1 student



A.



B.



C.

Name: _____

Test: 1st Math Test B


Date: _____





Teacher: Practice Test

3. Which of these equals

$10 + 5$

- A. $15 - 5$
 - B. $20 - 10$
 - C. $20 - 5$
-

4. Which numbers are covered by the s in the box below?

1	2		4	5
		8		
11			14	

- A. 5, 6, 10, 15
 - B. 3, 6, 9, 12
 - C. 4, 8, 12, 15
-

Name: _____

Test: 1st Math Test B

Date: _____

Teacher: Practice Test

Look at the picture below.






5. How many  are there in all?

- A. 4
- B. 5
- C. 6

Billy has these two shapes.



6. Which new shape could Billy make by putting these two shapes next to each other?

- A. 
- B. 
- C. 

Name: _____

Test: 1st Math Test B

Date: _____

Teacher: Practice Test

7. Vicki is 6 years old. She is 3 years younger than her sister. How old is her sister?

- A. 3 years old
 - B. 9 years old
 - C. 12 years old
-

8. Add.

$$\begin{array}{r} 50 \\ + 40 \\ \hline \end{array}$$

- A. 90
 - B. 80
 - C. 40
-

Ryan is making a fence like the one shown below.



9. What should the next part of the fence look like?

- A.
 - B.
 - C.
-


Name: _____

Test: 1st Math Test B

Date: _____

Teacher: Practice Test

10. The girl below has 5 balloons in one hand and 8 balloons in the other hand.



How many balloons does the girl have in all?

- A. 3
 - B. 12
 - C. 13
-

11. Which sign should you use if you wanted to know how many crayons and pencils you have all together?

- A. =
 - B. -
 - C. +
-

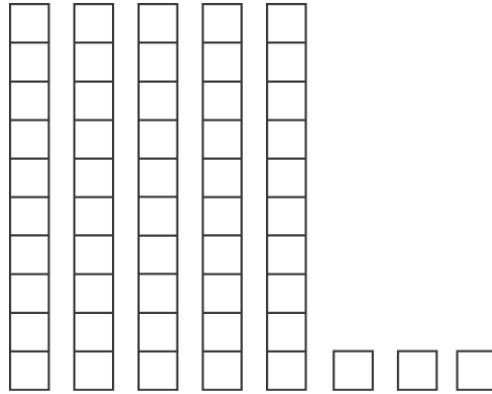
Name: _____

Test: 1st Math Test B

Date: _____

Teacher: Practice Test

12. How many tens and ones are shown below?



- A. 6 tens and 6 ones
 - B. 4 tens and 0 ones
 - C. 5 tens and 3 ones
-

Look at the chart below.

1	2	3	4	5
6	7	8	9	10
11		X		
16	17	18	19	20

13. What number goes where the X is?

- A. 13
 - B. 14
 - C. 15
-

Name: _____


Test: 1st Math Test B

Date: _____

Teacher: Practice Test

14. Which number has 5 in the tens place?

- A. 26
 - B. 45
 - C. 57
-

15. Which set of coins is worth the same as  ?

- A. 
 - B. 
 - C. 
-

16. What does $4 + 4$ equal?

- A. 0
 - B. 8
 - C. 9
-

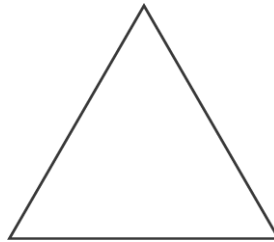
Name: _____

Test: 1st Math Test B

Date: _____

Teacher: Practice Test

Look at the shape below.



17. What is the shape?

- A. triangle
 - B. square
 - C. rectangle
-

18. Look at the numbers in the boxes. When counting by ones, what number belongs in the empty box?

4		6	7
---	--	---	---

- A. 1
 - B. 3
 - C. 5
-

19. Which shows the number sixty-three?

- A. 603
 - B. 63
 - C. 36
-

Name: _____

Test: 1st Math Test B

Date: _____

Teacher: Practice Test


20. Two classes of 1st graders get on the bus. There are 21 children in each class. About how many children get on the bus?

- A. about 20 children
 - B. about 30 children
 - C. about 40 children
-




21. Which number shows fifty-three?

- A. 53
 - B. 55
 - C. 35
-

The picture below shows twelve marbles.



22. Which of the following shows twelve marbles in another way?



Name: _____

Test: 1st Math Test B

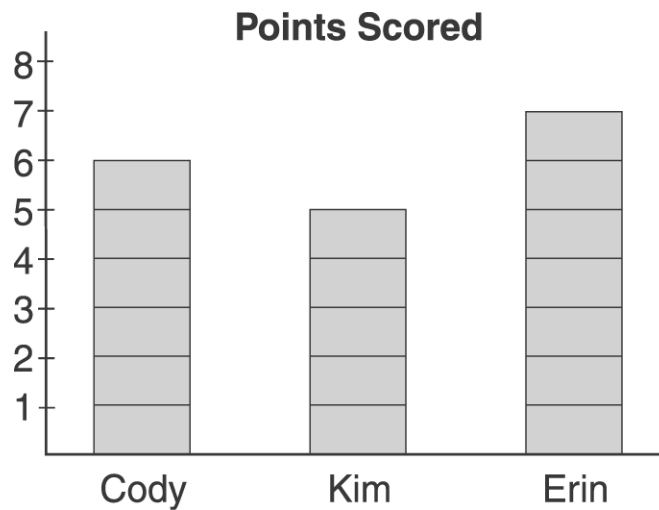
Date: _____

Teacher: Practice Test

23. Which is three more than eight?

- A. 5
 - B. 11
 - C. 38
-

The graph below shows how many points some children scored in a game.



24. Which child scored the most points?

- A. Cody
 - B. Kim
 - C. Erin
-

Name: _____

Test: 1st Math Test B

Date: _____

Teacher: Practice Test

25. Which box shows 30 cents?

A.



B.



C.



26. There were 8 children at the ski club meeting. There were 6 chairs for the children. How many more chairs were needed?

A. 2

B. 3

C. 4

Name: _____


Test: 1st Math Test B

Date: _____

Teacher: Practice Test

There are 8 turtles on an island.

This many more come.



27. Now how many turtles are there in all?

- A. 10
 - B. 11
 - C. 12
-

28. Which numbers are in order from least to greatest?

- A. 11, 12, 13
 - B. 25, 28, 27
 - C. 59, 57, 60
-

29. Penny wants to know how warm it is outside. To find out she would use a

- A. scale.
 - B. ruler.
 - C. thermometer.
-


Name: _____

Test: 1st Math Test B

Date: _____

Teacher: Practice Test

30. What time does the clock below show?



- A. 6:00
 - B. 12:30
 - C. 1:30
-