

Georgia  
**CRCT**  
online



## 1st Grade Math Test

First Grade Mathematics  
Test

Practice Test

Name: \_\_\_\_\_

Date: \_\_\_\_\_

### **Instructions:**

Name: \_\_\_\_\_

Test: 1st Grade Math Test

Date: \_\_\_\_\_

Teacher: Practice Test

---

---

James has the coins shown below.



1. How much money does he have?

- A. 3¢
  - B. 10¢
  - C. 16¢
- 

2. Look at the numbers below.

67	68		70	
----	----	--	----	--

Which numbers belong in the empty boxes?

- A. 69, 71
  - B. 71, 72
  - C. 66, 69
-

Name: \_\_\_\_\_

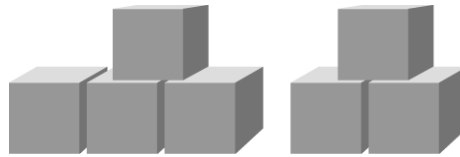
Test: 1st Grade Math Test

Date: \_\_\_\_\_

Teacher: Practice Test

---


Look at the picture below.



3. Which number sentence tells how many blocks there are in all?

- A.  $3 + 5 = 8$
  - B.  $4 + 5 = 9$
  - C.  $3 + 4 = 7$
- 

Look at the number line below.



4. What is the missing number?

- A. 14
  - B. 15
  - C. 16
- 

5. Subtract.

$$\begin{array}{r} 47 \\ - 2 \\ \hline \end{array}$$

- A. 27
  - B. 45
  - C. 49
-

Name: \_\_\_\_\_

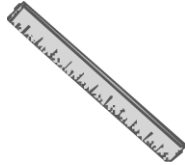

Test: 1st Grade Math Test

Date: \_\_\_\_\_

Teacher: Practice Test

---

6. Which instrument helps us tell time?



---

7. Which is another way to write 20?

A.  $15 + 5$

B.  $12 + 7$

C.  $8 + 16$

---

Name: \_\_\_\_\_

Test: 1st Grade Math Test

Date: \_\_\_\_\_

Teacher: Practice Test

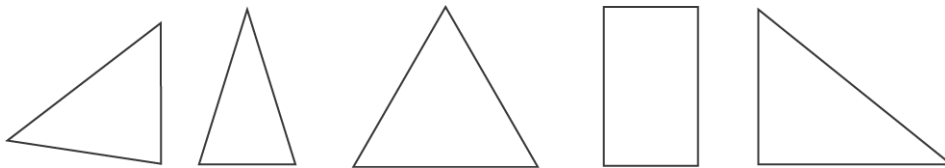
---


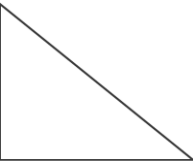

8. What time does the clock below show?



- A. 6:30
  - B. 7:30
  - C. 8:30
- 

9. Look at the set of shapes. Which shape does NOT fit with the others?



- A. 
  - B. 
  - C. 
-

Name: \_\_\_\_\_

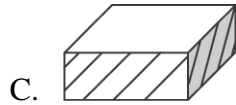
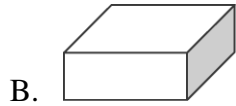
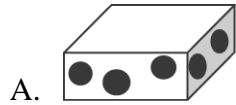
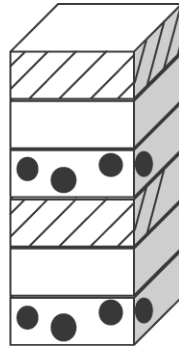
Test: 1st Grade Math Test

Date: \_\_\_\_\_

Teacher: Practice Test

---

10. Which block should go on top to continue the pattern?



Name: \_\_\_\_\_


Test: 1st Grade Math Test

Date: \_\_\_\_\_

Teacher: Practice Test

---

11. Which is the largest flower?



---

12. David has 17 books. Chris has 22 books. Which number sentence shows how many books Chris and David have in all?

- A.  $17 + 22 = 39$
  - B.  $22 - 17 = 5$
  - C.  $17 + 2 = 19$
-

Name: \_\_\_\_\_


Test: 1st Grade Math Test

Date: \_\_\_\_\_

Teacher: Practice Test

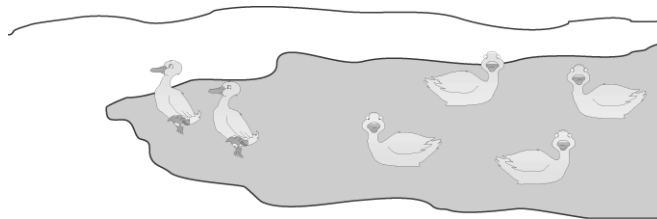
---

13. What time is it?



- A. 5:00
  - B. 12:25
  - C. 12:00
- 

Use the picture below to answer question 14.



14. How many ducks will be in the pond after two ducks leave?

- A. 2
  - B. 4
  - C. 8
-

Name: \_\_\_\_\_

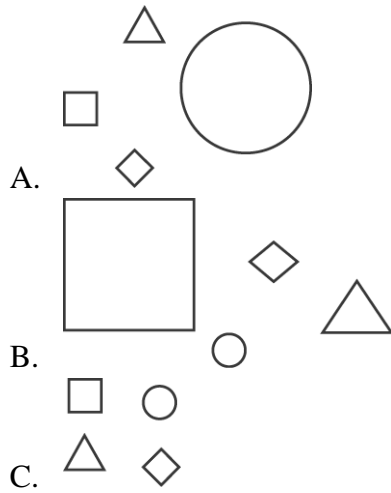
Test: 1st Grade Math Test

Date: \_\_\_\_\_

Teacher: Practice Test

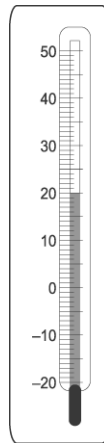
---

15. Which of the following shows the objects sorted by size?



---

Look at the instrument below.



thermometer

16. What should you use this instrument to measure?

- A. the length of a pencil
  - B. the temperature of the air
  - C. the weight of an apple
-

Name: \_\_\_\_\_

Test: 1st Grade Math Test

Date: \_\_\_\_\_

Teacher: Practice Test

---

17. Which number comes next?

10, 11, 12, 13, \_\_\_\_

- A. 13
  - B. 14
  - C. 15
- 

18. One nickel is equal to how many cents?

- A. 5¢
  - B. 10¢
  - C. 25¢
- 

Bert has the pennies shown in the picture below.



19. How many pennies does Bert have?

- A. 11
  - B. 12
  - C. 13
-

Name: \_\_\_\_\_

Test: 1st Grade Math Test

Date: \_\_\_\_\_

Teacher: Practice Test

---

Luis has the coins shown below.



20. Which coin is worth the same as the coins Luis has?

- A. 
- B. 
- C. 

---

Look at the pattern below.

**10 20  40 50**

21. Which number belongs in the box?

- A. 25
  - B. 30
  - C. 35
-

Name: \_\_\_\_\_

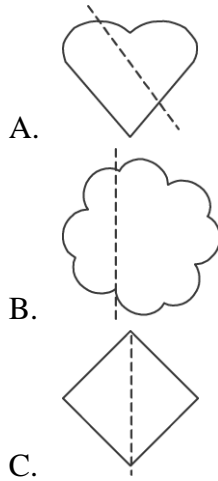
Test: 1st Grade Math Test

Date: \_\_\_\_\_

Teacher: Practice Test

---

22. Which shape is the same on both sides of the dotted line?



Look at the sign below.

=

23. What does it mean when this sign is between 2 numbers?

- A. You should add the numbers.
  - B. You should subtract the 2nd number.
  - C. The numbers are the same.
- 

24. Which number has a 6 in the one's place?

- A. 62
  - B. 29
  - C. 16
-

Name: \_\_\_\_\_

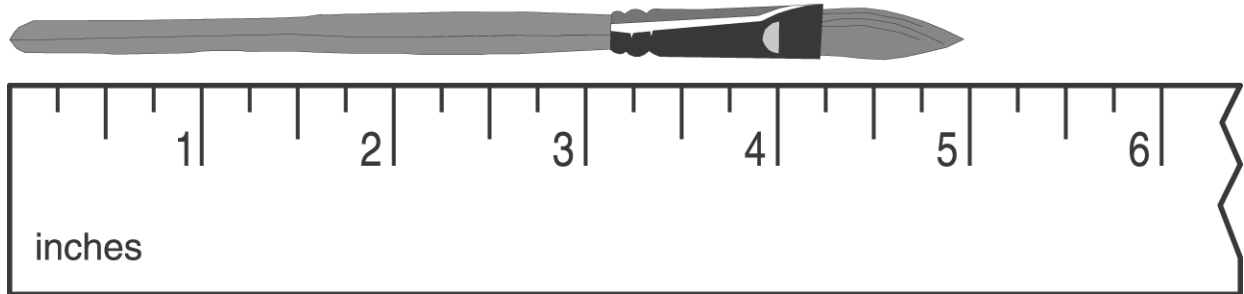
Test: 1st Grade Math Test

Date: \_\_\_\_\_

Teacher: Practice Test

---

25. About how long is this paintbrush?



- A. 4 inches
  - B. 5 inches
  - C. 6 inches
- 

26. Add.

$$\begin{array}{r} 6 \\ 4 \\ + 3 \\ \hline \end{array}$$

- A. 10
  - B. 13
  - C. 14
- 

27. Which number comes next?

10, 11, 12, 13, \_\_\_\_

- A. 13
  - B. 14
  - C. 15
-

Name: \_\_\_\_\_

Test: 1st Grade Math Test

Date: \_\_\_\_\_


Teacher: Practice Test

---

28. Which picture shows 15¢?

- A. 
- B. 
- C. 

29. Look at these dogs. How many ears are on these dogs all together?



- A. 8  
B. 12  
C. 16
-

Name: \_\_\_\_\_

Test: 1st Grade Math Test

Date: \_\_\_\_\_

Teacher: Practice Test

---

Look at the squares below.



30. Which squares are the same size?

- A. 1 and 2
  - B. 2 and 3
  - C. 1 and 3
-