

Georgia  
**CRCT**  
online



## 1st Math Quiz B

First Grade Mathematics  
Quiz

Practice Test

Name: \_\_\_\_\_

Date: \_\_\_\_\_

### **Instructions:**

Name: \_\_\_\_\_

Quiz: 1st Math Quiz B

Date: \_\_\_\_\_

Teacher: Practice Test

1. There are 7 children in a group, and each child has an apple. How many apples and children are there in all?

- A. 14
- B. 10
- C. 7

Look at the pattern below.



2. Which coin is missing?



Name: \_\_\_\_\_

Quiz: 1st Math Quiz B

Date: \_\_\_\_\_

Teacher: Practice Test

---

3. Which set of numbers can you put in the  $\triangle$  to make the number pattern correct? 10,  $\triangle$ , 12, 13,  $\triangle$ , 15, 16, 17,  $\triangle$ , 19, 20

- A. 12, 14, 19
  - B. 13, 15, 17
  - C. 11, 14, 18
- 

4. Helga has 10 flowers in a flowerpot. 3 of the flowers are red. The rest are white. How many of the flowers are white?

- A. 7
  - B. 8
  - C. 9
- 

5. What number comes next?

14, 15, 16, 17, \_\_\_\_

- A. 18
  - B. 19
  - C. 20
- 

6. Joe had 12 books. Then he got 3 more. How many books does Joe have now?

- A. 9
  - B. 15
  - C. 17
-

Name: \_\_\_\_\_

Quiz: 1st Math Quiz B

Date: \_\_\_\_\_

Teacher: Practice Test

---

7. Two classes of 1st graders get on the bus. There are 21 children in each class. About how many children get on the bus?

- A. about 20 children
  - B. about 30 children
  - C. about 40 children
- 

Look at the number sentence below.

$$9 - 3 \bigcirc 7$$

8. Which sign belongs in the circle?

- A. >
  - B. <
  - C. =
-

Name: \_\_\_\_\_

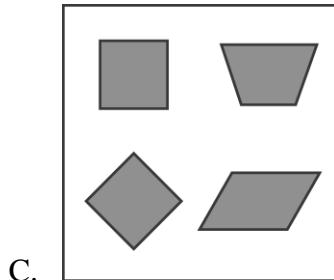
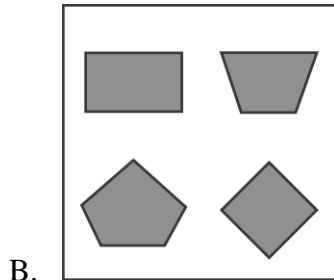
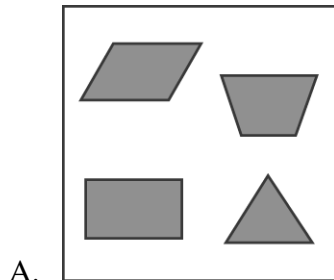
Quiz: 1st Math Quiz B

Date: \_\_\_\_\_

Teacher: Practice Test

---

9. Which set has only shapes with 4 sides?



Name: \_\_\_\_\_

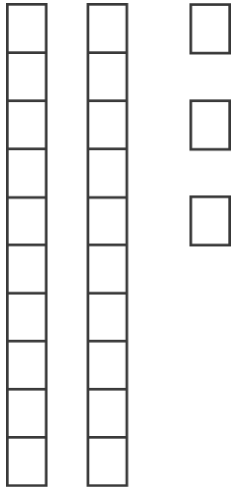
Quiz: 1st Math Quiz B

Date: \_\_\_\_\_

Teacher: Practice Test

---




10. Which number is represented by the model?



- A. 23
  - B. 32
  - C. 203
- 

Look at the chart below.

**Number of Rainbows Each Year**

Year 1	
Year 2	
Year 3	

Key: Each  stands for one rainbow.

11. Which year had the most rainbows?

- A. Year 1
  - B. Year 2
  - C. Year 3
-

Name: \_\_\_\_\_

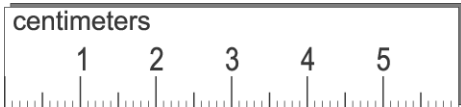
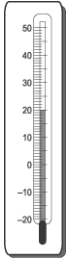
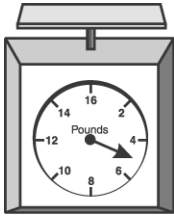
Quiz: 1st Math Quiz B

Date: \_\_\_\_\_

Teacher: Practice Test

---

12. Which instrument should Melissa use to weigh her pet rabbit?



---

13. Which of these equals 12?

- A.  $4 + 4$
- B.  $8 + 8$
- C.  $6 + 6$

---

14. Kendra has to go to room twelve for her music class. Which number is Kendra looking for?

- A. 2
  - B. 12
  - C. 20
-

Name: \_\_\_\_\_

Quiz: 1st Math Quiz B

Date: \_\_\_\_\_

Teacher: Practice Test

---

15. The picture below shows all of Rachel's cousins.

How many cousins does Rachel have?

- A. 10
  - B. 11
  - C. 12
-