

Georgia
CRCT
online



1st Math Quiz A

First Grade Mathematics
Quiz

r blakely

Name: _____

Date: _____

Instructions:

Name: _____

Quiz: 1st Math Quiz A

Date: _____

Teacher: r blakely

1. Harry made 11 points in the game. Jose made 3 more points than Harry. How many points did Jose make?

- A. 8
 - B. 13
 - C. 14
-

2. What is the name of the shape below?




- A. triangle
 - B. circle
 - C. square
-





Name: _____

Quiz: 1st Math Quiz A

Date: _____

Teacher: r blakely

3. Which numbers are covered by the s in the box below?

1	2		4	5
		8		
11			14	

- A. 5, 6, 10, 15
 - B. 3, 6, 9, 12
 - C. 4, 8, 12, 15
-

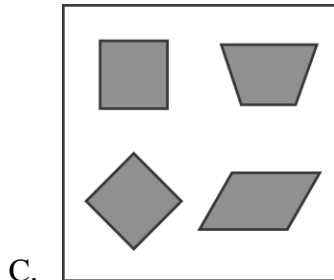
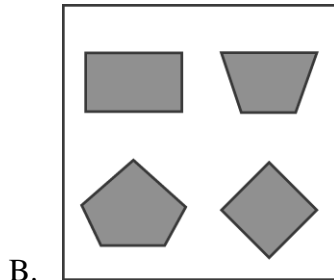
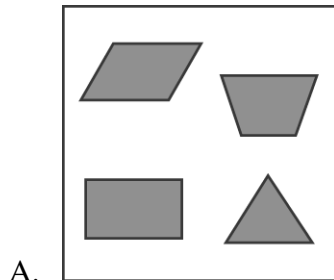
Name: _____

Quiz: 1st Math Quiz A

Date: _____

Teacher: r blakely

4. Which set has only shapes with 4 sides?




Name: _____

Quiz: 1st Math Quiz A

Date: _____

Teacher: r blakely




5. Look at this picture of birds.



ABOUT how many birds are shown?

- A. 10
- B. 30
- C. 90

6. Which nest has 4 eggs in it?



Name: _____

Quiz: 1st Math Quiz A

Date: _____

Teacher: r blakely

7. What number is 3 more than 14?


- A. 16
 - B. 17
 - C. 18
-

8. Which shape belongs in the space?



- A. circle
 - B. triangle
 - C. square
-

Look at the grid below.



9. How many of the squares are shaded?

- A. 5
 - B. 6
 - C. 7
-

Name: _____

Quiz: 1st Math Quiz A

Date: _____

Teacher: r blakely

Ryan is making a fence like the one shown below.



10. What should the next part of the fence look like?

- A.
- B.
- C.

11. Which shows the number sixty-three?

- A. 603
- B. 63
- C. 36

12. Which of these is equal to 12?

- A. $3 + 11$
 - B. $15 - 4$
 - C. $7 + 5$
-

Name: _____

Quiz: 1st Math Quiz A

Date: _____

Teacher: r blakely

Luis has the coins shown below.



13. Which coin is worth the same as the coins Luis has?



Name: _____

Quiz: 1st Math Quiz A

Date: _____

Teacher: r blakely

Look at the three friends below.



Max



Debbie



Doug

14. Who is the shortest?

- A. Max
 - B. Debbie
 - C. Doug
-

Name: _____

Quiz: 1st Math Quiz A

Date: _____

Teacher: r blakely

15. Which picture is NOT the same on both sides of the line?

